



G.D Goenka Public School

Saderbal, Lal Bazar Srinagar, J&K - 190023 - Affiliated to CBSE Vide No.730090
Email: info@gdgoenkasrinagar.com, Ph. No. 9070102020, 9070103030 - www.gdgoenkasrinagar.com



Name: _____

Class:UKG

Section: _____

Adm No: _____

Subject:Math

Teacher Incharge: _____

Winter Assignment,Session (2023-24)

1. Write the missing numbers. 50-99

| | | | | | | | | | |
|----|----|----|----|----|----|----|----|----|----|
| TO | TO | TO | TO | TO | TO | TO | TO | TO | TO |
| 50 | | | | | | 80 | | | |
| | | 61 | | | | | | | |
| | | | | 72 | | | | 92 | |
| | | | | | | | | | |
| | | | | | | | | | |

2. Write the Number names of the given numbers and draw the value.

| Number | Number name | Value |
|--------|-------------|-------|
| 3 | | |
| 9 | | |
| 10 | | |
| 6 | | |
| 2 | | |
| 0 | | |
| 4 | | |

3. Circle the correct number of each word.

| | |
|-------------|------------|
| Twenty | 30, 20, 10 |
| Thirty Four | 24, 34, 44 |
| Forty | 40, 45, 47 |
| Fifty Three | 52, 50, 53 |









| | |
|-------|------------|
| Ten | 10, 3, 6 |
| Sixty | 79, 82, 60 |

4. Write the numbers that come before and after the given number.





















5. Write the correct symbol in the boxes . The first one is done for you.
 (greater than >) (lesser than <) (equal to =)

| | | |
|----------------------------|----------------------------|----------------------------|
| 4 < 6 | 9 <input type="text"/> 3 | 5 <input type="text"/> 4 |
| 2 <input type="text"/> 2 | 7 <input type="text"/> 8 | 3 <input type="text"/> 5 |
| 23 <input type="text"/> 18 | 12 <input type="text"/> 12 | 76 <input type="text"/> 69 |
| 45 <input type="text"/> 55 | 9 <input type="text"/> 90 | 16 <input type="text"/> 8 |
| 64 <input type="text"/> 52 | 37 <input type="text"/> 37 | 89 <input type="text"/> 91 |
| 27 <input type="text"/> 29 | 42 <input type="text"/> 40 | 65 <input type="text"/> 68 |
| 71 <input type="text"/> 23 | 32 <input type="text"/> 33 | 39 <input type="text"/> 40 |
| 53 <input type="text"/> 35 | 13 <input type="text"/> 14 | 11 <input type="text"/> 11 |
| 82 <input type="text"/> 92 | 29 <input type="text"/> 26 | 72 <input type="text"/> 69 |










Activity1. Use the dice to help you add (+) the numbers.

| | |
|--|---|
|  $2 + 3 = \underline{\quad}$ |  $5 + 1 = \underline{\quad}$ |
|  $4 + 2 = \underline{\quad}$ |  $6 + 3 = \underline{\quad}$ |
|  $5 + 5 = \underline{\quad}$ |  $3 + 4 = \underline{\quad}$ |
|  $1 + 2 = \underline{\quad}$ |  $5 + 6 = \underline{\quad}$ |

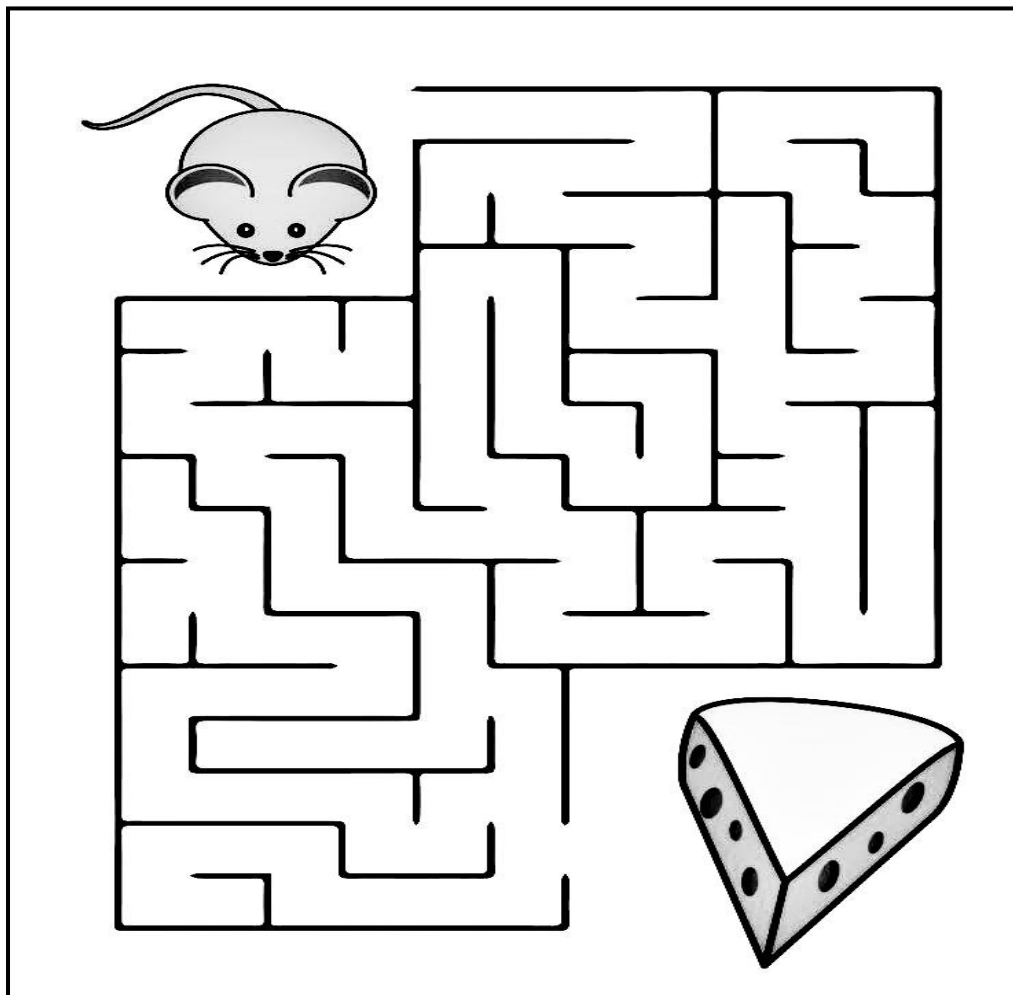
Activity2: See the pattern below . Can u draw what comes last?

| | | | | | |
|---|---|---|---|--|-------|
|  |  |  |  |  | <hr/> |
|  |  |  |  |  | <hr/> |
|  |  |  |  |  | <hr/> |
|  |  |  |  |  | <hr/> |

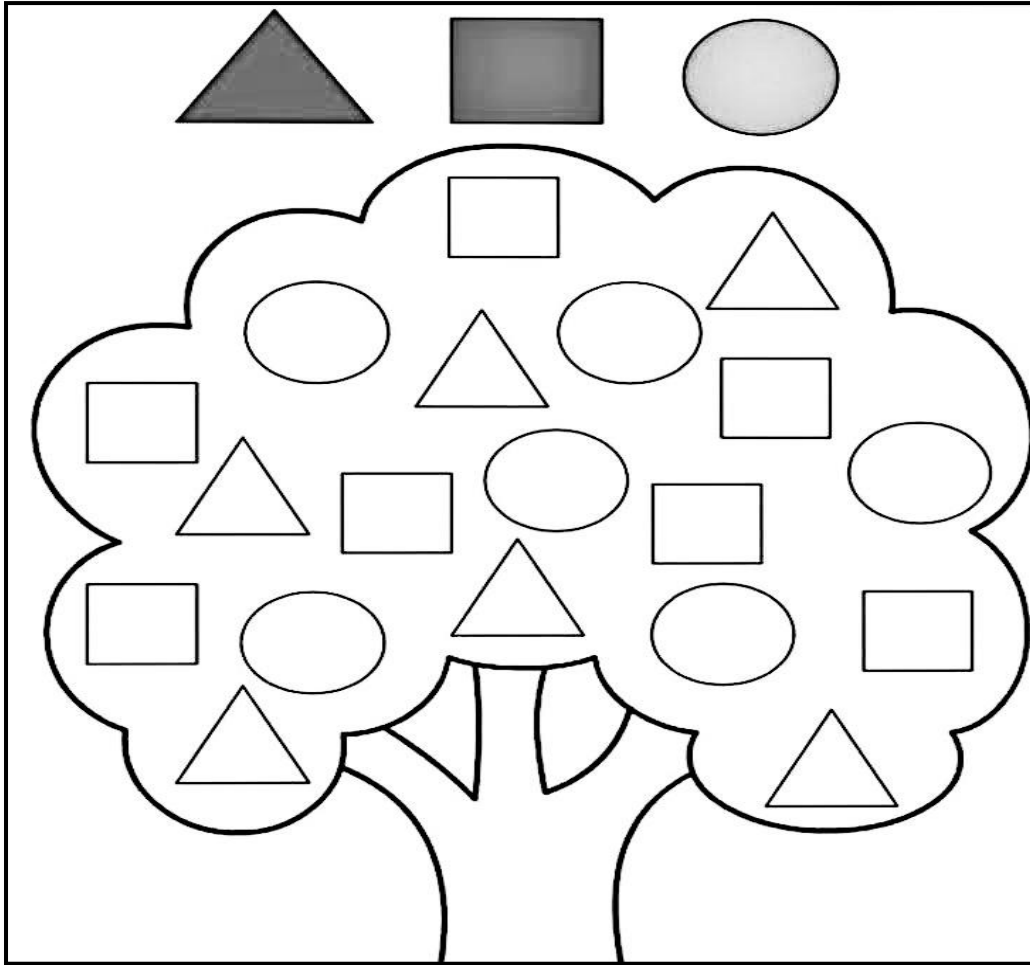
Activity3: :Count and Colour the flowers . Fill in the correct circle.

| | | |
|--|--|--|
|  (2) (3) (1) |  (5) (7) (6) |  (4) (3) (5) |
|  (3) (5) (4) |  (9) (7) (8) |  (1) (2) (3) |
|  (7) (5) (6) |  (3) (2) (1) |  (8) (10) (9) |

Activity 4:Help the mouse to reach the cheese.



Activity 5: Cut the given shapes from newspaper / waste paper / magazines and paste them on the shape tree.



Activity 6: With the help of matchsticks form the given pattern and try to make atleast 5 different patterns.

