



GRADE 6 WINTER ASSIGNMENTS AND WORKSHEETS [SESSION 2023-24]

1. ENGLISH

Q1. Analyse the poem *Mirror* using "SMILE" technique.



Q2. Write and draw the character sketch of Sherlock Holmes. (Draw the sketch on a coloured craft paper).

Q3. Write a few puns on Kashmir on *pan* (leaf).

Q4. Write the *précis* of the chapter *The Special Prize*.

Q5. Write the central idea of the poem *In Morning Dew*.

Q6. Collect a newspaper clipping. Identify and underline the usage of tenses on the same.

Q7. Paraphrase the following lines:

*Not one would mind, neither bird nor tree
 If mankind perished utterly;
 And Spring herself, when she woke at dawn,
 Would scarcely know that we were gone.*

Q8. Please find attached the worksheet on Direct and Indirect Speech.

Q9. Please find attached the worksheet on Active and Passive voice.

Q10. Please find attached the worksheet on Tenses.

The diagram illustrates reported speech with two scenarios. In the first, a boy says "I WILL CALL YOU TOMORROW." on Friday night, and the girl reports "HE SAID THAT HE WOULD CALL ME THE NEXT DAY" on the following Tuesday. The logo "leverage edu" is at the top.

The diagram shows three types of grammatical voice: active, passive, and passive-aggressive. Each is illustrated with a cartoon character and a speech bubble. Active: "No one liked my post." Passive: "My post was not liked by anyone." Passive-aggressive: "Never mind." The logo "John Atkinson, Wrong Hands" is at the bottom.

WORKSHEET ON DIRECT AND INDIRECT SPEECH

A. Punctuate these quirky sentences.

1. The letter said to the stamp stick to me and we will go places.

2. Zero said to eight I think your belt is too tight at the waist.

3. The window said to the door why are you squeaking I am the one with pane.

4. The cricket players said we never sweat because we have huge fans.

5. Let us go for a dip said one crisp to another.

B. Rewrite the following sentences in indirect speech.

1. Rahim says, "She is reading Pride and Prejudice."

2. The teacher said to us, "The cuckoo bird sings merrily before the onset of summer."

3. Rishi said, "My brother may arrange for the air tickets."

4. The lady said to the child, "Be careful at the sea beach."

5. Nasreen said, "The boys were injured."

B- Rewrite the following sentences in direct speech.

1. She says she likes jogging in the morning.

2. Mother told Rohan that he was late for the school.

3. You told Nita you had been baking a chocolate cake the previous evening.

4. The cleanliness monitor warned the students not to litter the corridor.

5. Ahmad told Aisha that her water bottle is empty.

WORKSHEET ON ACTIVE AND PASSIVE VOICE

Underline the objects of the verb. Then, rewrite these sentences in passive voice.

1. The villagers took the injured to the hospital.
2. The principal called a meeting of all the staff members.
3. Her husband sent her a bouquet of a hundred rose.
4. Grandpa bakes cakes every Christmas.
5. The gardener will plant new saplings next week.
6. I ordered a pizza for dinner.
7. We are going to watch the new horror movie this week.
8. The travel agent has made all the reservation for our trip.

Fill in the blanks with the simple present tense forms of the verbs given in the brackets.

(Refer to Page 88)

1. You The old man to cross the road. (help)
2. Ravi English fluently. (speak)
3. Geeta my problem. (understand)
4. Water In winter. (freeze)
5. His brothers down the trees. (cut)
6. The ship in the ocean. (sink)
7. Suman For more than ten hours. (sleep)
8. The moon round the earth. (revolve)
9. Salim To see his photograph. (want)
10. You always lie. (tell)

Fill in the blanks with the past perfect tense forms of the verbs given in the brackets.

(Refer to Page 102)

1. The train at the station when I reached there. (arrive)
2. The police him before the end of this month. (arrest)
3. The shopkeepers their shops before the Inspector came. (close)

4. When I reached the school the bell (ring)
5. We the work when the teacher came. (complete)

Fill in the blanks with the future continuous tense forms of verbs given in the brackets.

(Refer to Page 97)

1. You a novel at this time tomorrow. (read)
2. Servant the floor tomorrow. (clean)
3. The mason a wall. (build)
4. Puja a lie to us. (tell)
5. My friends from school tomorrow. (return)

2. Science, Winter Assignment

Name: _____ Roll no: _____ Section: _____

1. Use the periodic table to write the symbol of each elements:

Elements	Symbols	Elements	Symbols
Silicon		Barium	
Carbon		Gold	
Copper		Mercury	
Chlorine		Aluminum	
Potassium		Tungsten	
Calcium		Iron	
Sodium		Fluorine	
Nitrogen		Zinc	
Silver		Germanium	
Lead		Arsenic	
Helium		Boron	
Neon		Magnesium	

2. Write the names for the following compounds:

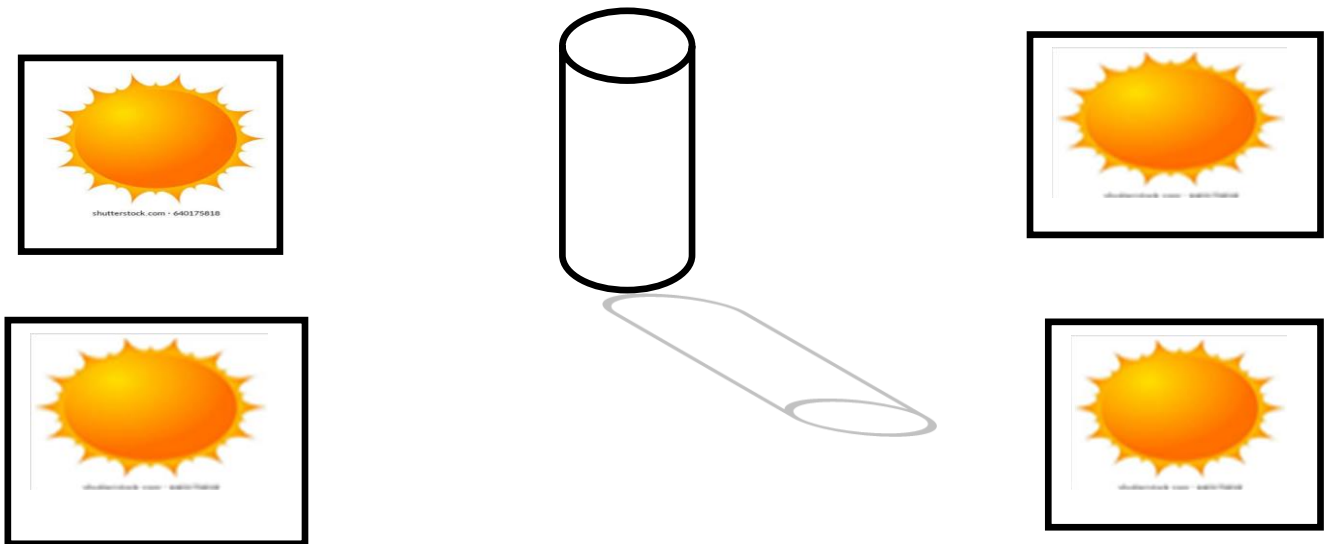
Formula	Compound	Formula	Compound
NaCl		CaO	
CO ₂		ZnO	
H ₂ O		FeO	
MgO		PbO	
CuO		PbS	
KCl		SO ₂	
HCl		CuS	

3. Match the elements with their symbols:

Elements
Iron
Sodium
Silver
Potassium
Iodine
Aluminum
Lithium
Beryllium
Argon

Symbols
Ag
Al
Be
B
Ar
Fe
Na
I
Li

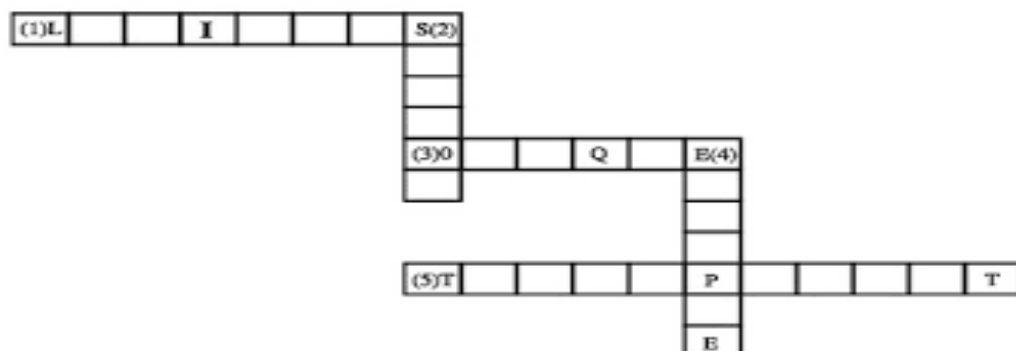
4. Choose the correct position of the sun based on where the shadow is formed:



5. Multiple choice questions:

- a. The rectilinear propagation of light states
 - 1. Light always travels in a curved path
 - 2. Light always travels in a circular path
 - 3. Light always travels in a Zig Zag path
 - 4. Light always travels in a straight path
- b. Shadow can change _____ according to how near or far the object is from the source light
 - 1. Volume
 - 2. Size
 - 3. Area
 - 4. None of these
- c. If an object has its own shape and feels hard it is a
 - 1. Gas
 - 2. Solid
 - 3. Liquid
 - 4. None of these
- d. A bowl of water left in the sun all the day may dry up because
 - 1. The sun cools it into ice
 - 2. Cold weather turns it into a solid
 - 3. The heat evaporates the water into a gas
 - 4. Some other reason

6. Complete the following word ladder with the help of the clues given:

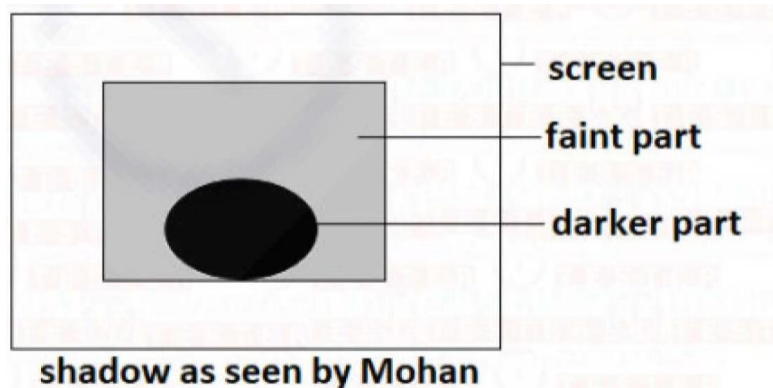
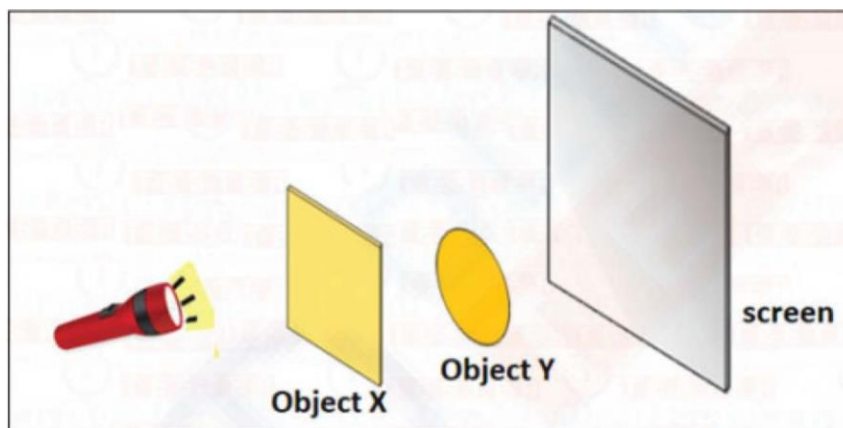


ACROSS

- 1 A body which has and emits light of its own.
- 3 A substance which does not allow light to pass through.
- 5 A substance which allow light to pass through it.

DOWN

- 2 This is formed when light is blocked by opaque object.
- 4 When an obscuring of the light from one celestial body by the passage of another between it.
7. Mohan set up the experiment as shown below. The shadows Mohan observed on the screen are as shown below. Which one of the following describes objects X and Y correctly?



- a. Both objects X and Y were opaque.
- b. Both objects X and Y were transparent.
- c. Object X was translucent but object Y was opaque.
- d. Object X was translucent but object Y was transparent.

8. Give reasons:

- a. What is shadow? Give a reason for its formations.
- b. White blood cells are part of immune system.
- c. Human Blood is red colored.
- d. Upward and downward movement of diaphragm occurs consecutively.
- e. Blood donation is considered to be superior of all donations.

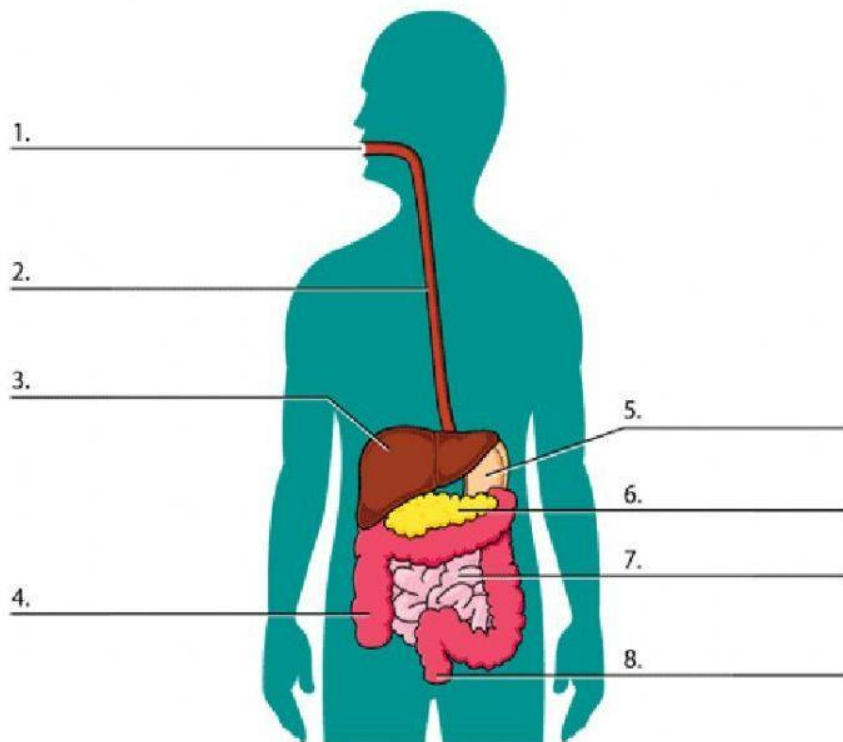
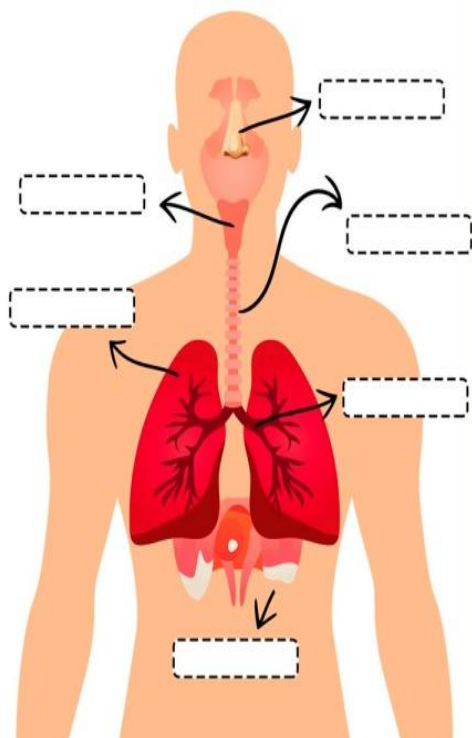
9. Your neighboring uncle has been diagnosed with hypertension. What should he do to keep the blood pressure within the normal range?

10. Make a working model of human heart. Watch the below given link for the same.

<https://youtu.be/yG8-kJ6sj38>

11. Learn first twenty elements of the periodic table.

12. Label the diagrams given below



13(a). Create a concept map with these key words. (Measurement pg.14)

Thermometers, -10°C to 110°C , Laboratory thermometer, No kink, 35°C to 42°C , Clinical thermometer, Kink.

(b) Draw three temperature scales.

3. SST WINTER ASSIGNMENTS

1. Visit a library or museum in your area and try to find old photographs of your city. Ask your elders or their friends to describe the city during their times. Make a “Memory Project” on the same.
2. Activity: On an outline map of India, mark the following and practice the same.
 - (i) The standard Meridian of India.
 - (ii) The Tropic of Cancer
 - (iii) Countries which share a common border with India.
 - (iv) The Northernmost and the Southernmost tip of India.
 - (v) The island groups.

- 3. Exploration Activity: Despite government's effort, inequalities still exist in Indian society. List out few of them in detail on coloured sheets.**
- 4. Write down the teachings of Gautam Buddha & Vardhamana Mahavira.**
- 5. Pen down the structure and role of District Administration.**
- 6. Compare & contrast the Administrative Functions, centres of craft, religious towns, & centres of trade in Villages and Cities and how they are interdependent on each other. (Create a visual presentation in which you could conduct interviews with people from both the areas or create a virtual tour via multimedia presentations)**

Note: Prepare a project file for your assignment. Paste the materials (maps, pictures, scrapbook pages) related to the project wherever you find necessary.

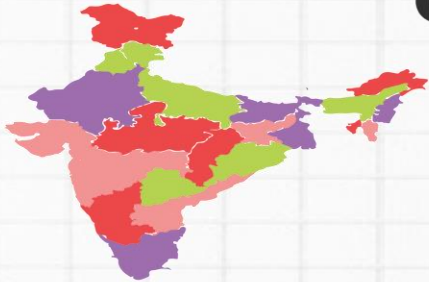
Winter Assignment SST

01

Visit a library or museum in your area and try to find old photographs of your city. Ask your elders or their friends to describe the city during their times. Make a "Memory Project" on the same.



02



On an outline map of India, mark the following and practice the same.
(i) The standard Meridian of India.
(ii) The Tropic of Cancer.
(iii) Countries which share a common border with India.
(iv) The Northernmost and the Southernmost tip of India.
(v) The island groups.

03

Despite government's effort, inequalities still exist in Indian society. List out few of them in detail on coloured sheets.



04



Compare & contrast the Administrative Functions, centres of craft, religious towns, & centres of trade in Villages and Cities and how they are interdependent on each other. (Create a visual presentation in which you could conduct interviews with people from both the areas or create a virtual tour via multimedia presentations)

Note: Prepare a project file for your assignment. Paste the materials (maps, pictures, scrapbook pages) related to the project wherever you find necessary.

History

Four Noble truth & Eight Fold Path of Buddhism



Sects of Buddhism



Tri-ratnas of Jainism



Sects of Jainism



Refer to Chapter no. 6 (History)

WORKSHEET

Identifying the Parts of a Map

Below is a simple map. Identify its different parts by filling in the correct names.



1. _____

4. _____

2. _____

5. _____

3. _____

6. _____



EXPLORING DIFFERENT PHYSICAL DIVISIONS OF INDIA

REFER TO CHAPTER NO. 6 & 7 (GEOGRAPHY)




MOUNTAINS

Mountain characteristics

A large, empty rectangular box with a blue border, intended for writing about mountain characteristics.

How are mountains formed?

A large, empty rectangular box with a blue border, intended for writing about how mountains are formed.

DESERTS

Desert characteristics

A large, empty rectangular box with a brown border, intended for writing about desert characteristics.

Name some famous deserts.

A large, empty rectangular box with a brown border, intended for writing the names of famous deserts.

PLAINS

Plain characteristics



How are plains formed?



PLATEAUS

Plateaus characteristics



How are plateaus formed?




ISLANDS

Island characteristics



How are islands formed?



4.MATHS WINTER ASSIGNMENT

Chapter No.16

Topic: Mensuration

Q.1) Find the total distance covered by an athlete in taking 2 rounds of a rectangular park of length 150 m and breadth 80 m.


Q.2) A tailor wants to put lace around a square table cloth of side 20 cm. He bought 1m lace from the market. Find the length of lace left with him after completing the task.

Q.3) Find the number of square tiles required to cover the floor of a room whose length is 4 m and width 3 m, if each square tile is of side 0.2 m.

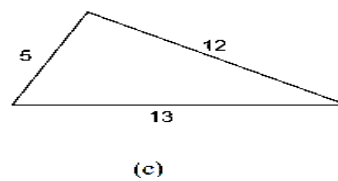
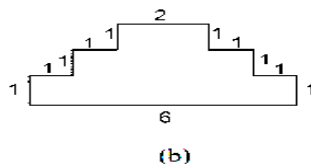
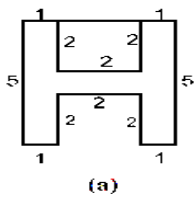
Q.4) Two equal sides of an isosceles triangle measure 10 cm each. Find the length of its third side if its perimeter is 32 cm.

Q.5) Find A piece of string is 60 cm long. What will be the length of each side if the string is used to form:
i) a square ii) an equilateral triangle iii) a regular pentagon

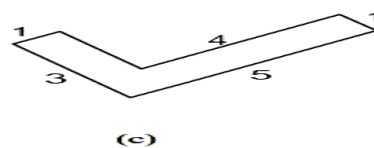
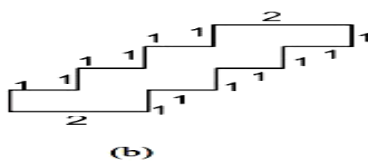
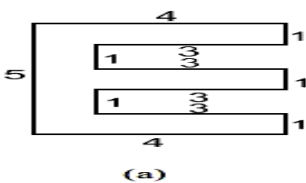
Q.6) A farmer's rectangular garden is adjacent to his house, (as shown in the figure).
The rectangular garden is 200 m long and 150 m wide. Find the cost of fencing three sides of this garden at the rate of 12 per meter.



Q.7) Find the perimeter of each of the following figures: (The measures are given in cm).



Q.8) Find the area of each of the following figures : (The measures area given in cm)



Q.9) The length of a rectangular park is 50 m and its area is 650 m^2 . Find its breadth.

Chapter No.10

Topic: Algebra

Q.1) Find the rule which gives the number of lines required to make the following pattern. Use a variable to write the rule.

- (i) Letter  _____
- (ii) Letter  _____
- (iii) Letter  _____
- (iv) Letter  _____

Q.No.2) Children stand 10 in a row to perform a drill. How many children can there be in a drill? Give a rule to calculate this. (Use n for the number of rows)

Q.No.3) Form an algebraic expression using the statements given below :

- (v) 17 subtracted from '-y' _____
- (vi) '-m' multiplied by 10 _____
- (vii) x divided by '-2' _____
- (viii) 4 added to 6 times y _____

Q.No.4) if y is Meena's age now in years how old will she be after 7 years? _____

Q.No.5) if the side of a regular septagon is m units, then what is it's perimeter? _____

Q.No.6) Is $2p - 3 > 7$ an algebraic equation? _____

Q.No.7) A teacher distributes 6 notebooks per student. How many notebooks are needed if x is the number of students?

Q.No.8) Pick out the correct solution from the values given in the bracket next to each equation:

- i) $r - 8 = 0$ (8, -8, 0, 1) $r =$ _____
- ii) $t / 3 = 21$ (7, 14, 21, 63) $t =$ _____
- iii) $k / 8 = 8$ (1, -1, 64) $k =$ _____

Q.No.9) complete the table and by inspection of the table find the solution to the equation $t / 4 = 4$

t	8	9	10	11	12	13	14	15	16	17	18	19
$\frac{t}{4}$	2	$2\frac{1}{4}$	$2\frac{2}{4}$	$2\frac{3}{4}$	-	-	-	-	-	-	-	-

Q.No.10) In a game of cricket there are n children but in football there n / 3 children. What Does this indicate?

Q.No.11) Give a mathematical expression for the statement : m multiplied by 5 and 6 subtracted from the product.

Q.No.12) Match the following:

- | | |
|-------------------|-------------|
| i) $5x = 20$ | (a) $x = 6$ |
| ii) $8 = x + 3$ | (b) $x = 4$ |
| iii) $12 / x = 4$ | (c) $x = 5$ |
| iv) $8 - x = 2$ | (d) $x = 3$ |

Q.No.13) Solve the equations:

i) $x / 2 = 18$ $x =$ _____

ii) $n - 12 = - 19$ $n =$ _____

iii) $3m / 2 = 9$ $m =$ _____

Chapter No.8

Topic: Ratio & Proportion

Q.No.1) Fill in the box:

$$14 / 21 = \square / 3 = 6 / \square$$

Q.No.2) Find the ratio of the following:

- (i) 21 hours to 49 hours _____
- (ii) 75 cm to 3 m _____
- (iii) A dozen to a score _____
- (iv) 1 hour to 20 minutes _____
- (v) A dozen to a gross _____

Q.No.3) Write True or False:

- (vi) $2 : 8 :: 4 : 16$ ()
- (vii) $500 : 200 :: 150 : 60$ ()
- (viii) $50 : 45 :: 30 : 20$ ()

Q.No.4) Fill in the blanks so that the numbers are in proportion :

- (ix) 20, 18, 40,.....
- (x), 35, 3, 15
- (xi) 25, 100,, 160
- (xii) 32,, 6, 12

Q.No.5) Find x, if the numbers are in proportion :

- (xiii) 3, 9, 9, x _____
- (xiv) 25, x, 1, 4 _____

Q.No.6) Divide ` 60 in the ratio 1:2 between Bulbul and Kanika :

- (i) Bulbul's share = _____
- (ii) Kanika's share = _____

Q.No.7) Give two equivalent ratios of 6 : 4

Q.No.8) Weight of 80 books in 160 kg. What is the weight of 25 books?

Q.No.9) Divide ` 1200 among A, B and C in the ratios 4: 5: 6.

- (i) A's share = _____
- (ii) B's share = _____
- (iii) C's share = _____

Q.No.10) In a class of 40 students, 15 like cricket, 20 like football and 5 like both cricket and football.

- i) Find the ratio of number of students who like cricket to those who like football.
- ii) Find the ratio of number of students who like football to those who like both.

Q.No.11) If 2, 5 and x are in proportion, find x _____ [Hint 2: 5:: 5: x]

Q.No.12) Find the ratio of 5 days to weeks.

Q.No.13) The cost of one dozen bananas is Rs 60. Find the cost of 8 bananas.

Q.No.14) In a class of 48 students, there are 12 girls and rest are boys. Find the ratio of : i) Girls to Boys. ii) Girls to total number of students.

Chapter No.4

Topic: Integers

Q.No.1) Write 'True' or 'False' for the following:

- (i) -20°C represent temperature "above 20°C "
- (ii) $8 > (-10)$
- (iii) $|-2| = 2$
- (iv) $|-4 - 2| = -6$
- (v) $(-3) > (-5)$

Q.No.2) Fill up the blanks:

- (i) Integer which is neither positive nor negative is _____
- (ii) Predecessor of (-99) is _____
- (iii) $|-26-14| =$ _____
- (iv) Successor of (-100) is _____
- (v) Largest 3-digit negative integer is _____

Q.No.3) Subtract (-25) from the sum of 15 and 35.

Q.No.4) Add the sum of (-2063) and 562 to (-2063)

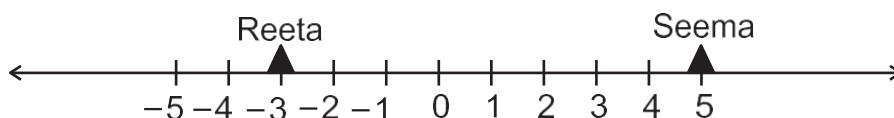
Q.No.5) Simplify:

- (i) $(10) + (-200) - (-500)$
- (ii) $23 - (-15) + 12$
- (iii) $(24 + 6) \div (-3)$
- (iv) $19 + \{10 \div (7 - 9)\}$
- (v) $12 - \{16 - (6 + 2 - 6 \div 3)\}$

Q.No.6) Write additive inverse of:

- i) (-6347)
- ii) 0
- iii) 4231
- iv) $2132 - 132$
- v) $-10 - 5$

Q.NO.7)



Observe the number line given above and answer the following :

(i) What is the position of Reeta on the number line?

(ii) What is the position of Seema?

(iii) What is the distance between Reeta and Seema?

Q.NO.8) Represent the following integers on a number line?

i) -7 ii) $+9$ iii) $7-2$ iv) $-5-4$ v) $4-9$

Q.NO.9) Enter the correct symbol $>$, $=$, $<$ in the following:

i) $0 _ (-2)$ ii) $(-7) _ (+2)$ iii) $-(10+5) _ (-15)$ iv) $16 _ (9+7)$

Q.NO.10) Represent the following numbers/expressions on a number line?

(i) -7 (ii) $+9$ (iii) $7-2$ (iv) $-5-4$ (v) $4-9$

Q.NO.11) Enter the correct symbol $>$, $=$, $<$ in the following:

i) $(-7) _ (2)$
ii) $7 _ (-12)$
iii) $0 _ (-2)$
iv) $(-16) _ (9+7)$
v) $-(10+5) _ (-15)$

Q.NO.12) Find the values of 'a' when:

i) $a + 10 = -18$

ii) $a - 3 = 7$

$a - 3 = 7$ (ii) $a - 3 = 7$

iii) $-13a = 91$

iv) $a \div 5 = 3$

5.URDU MAIN LANGUAGE [WINTER ASSIGNMENT]

سرمائی تعطیلات

سوال نمبر ۱:- اپنے والدین کی مدد سے جانے کہ بیس (۲۰) سال پہلے گلوبل وارمنگ کی کیا حالت تھی اور آج کیا حالت ہے۔ (بیس بیس جملے لکھئے)

سوال نمبر ۲:- نیچے دئے گئے محاورات کے معنی لکھئے اور جملوں میں استعمال کیجئے۔

راحت پانا بام عروج پر ہونا لپیٹ میں آنا تدارک کرنا چار چاند لگانا

سوال نمبر ۳:- پانی نظم کو نثر میں تبدیل کیجئے۔

سوال نمبر ۴:- شتر مرغ کا پورا حلیہ لکھئے اور شتر مرغ کے انڈے کون سیتا ہے اور کس طرح؟

سوال نمبر ۵:- مندرجہ ذیل الفاظ کے معنی لکھئے:

کھر نما جسامت غوطہ دلانا کھٹ پٹ قطبی علاقہ

سوال نمبر ۶:- بیس مترادفات لکھئے۔

سوال نمبر ۷:- خط کی کتنی قسمیں ہیں، کون کون اور ان میں سے دو خط لکھئے۔

سوال نمبر ۸:- مندرجہ ذیل جملوں میں سے اسم تصغیر، اسم کبیر، اسم صوت، اسم آلہ اور اسم ظرف الگ کر کے لکھئے:

(۱) آپ دوپہر کے وقت اپنے باغ میں قبینچی سے میوے کاٹ رہے تھے اور ایک ٹوکری میں رکھ رہے تھے۔

(۲) بھائی وہ ٹوکری نہیں ٹوکرا تھا۔ آج صبح میں بازار سے خرید کر لایا۔

(۳) وہ اپنے باغیچے میں کدال سے کام کر رہا ہے۔ اس باغیچے میں کہیں سے کائیں کائیں اور چوں چوں کی آواز آرہی ہے۔

تدریسی مقصد: لکھائی، پڑھائی کی مہارت کی جانچ اور ٹرم دوم کا اعادہ

پڑھیے اور سوچ کر صرف ایک لفظ میں جواب دیجیے۔ کیفیت پر غور کیجیے



کیفیت	جواب	سوال	
اچھائی	نیک	کیسا لڑکا	۱۔ نیک لڑکا والدین کی اطاعت کرتا ہے۔
برائی	کیسا انسپکٹر	۲۔ انسپکٹر ایک رشوت خور شخص نکلا۔
رنگ کی خاصیت	کیسا کتا	۳۔ کالے کتے نے بچی کو کاٹا۔
افغانستان سے نسبت	کون لوگ	۴۔ افغانی بڑے بہادر ہوتے ہیں۔
کشمیر سے نسبت	کیسے شال	۵۔ کشمیری شال دنیا بھر میں مشہور ہے۔
تعداد	کتنی لڑکیاں	۶۔ چار لڑکیاں گارہی ہیں۔
مقدار	کتنا دودھ	۷۔ گلاس میں تھوڑا دودھ ہے۔
خصوصیت	کیسی جھیل	۸۔ مانہل سب سے گہری جھیل ہے۔
برائی	کیسے لڑکے	۹۔ بے وقوف لڑکے وقت کی قدر نہیں کرتے۔
خصوصیت خوبی	کیسے استاد	۱۰۔ کالجوسر بڑے قابل استاد ہیں۔

مندرجہ ذیل جملوں میں سے فعل حال، فعل ماضی اور فعل مستقبل الگ الگ کر کے خالی جگہوں میں لکھ دیجیے
یسا کہ مثال میں سمجھایا گیا ہے۔

- ۱۔ میں ہر روز اسکول جاتا ہوں۔
- ۲۔ آپ کل اسکول نہیں گئے۔
- ۳۔ میں سوموار کو اسکول نہیں جاؤں گا۔
- ۴۔ لوگ مسجد کی طرف جا رہے ہیں۔
- ۵۔ میں نے عید کا چاند دیکھا۔
- ۶۔ وہ ایک ہفتے کے بعد لندن جائے گا۔
- ۷۔ آپ نے کیوں جھوٹ بولا؟
- ۸۔ میں ہمیشہ سچ بولتا ہوں۔

جملہ نمبر	فعل حال	فعل ماضی	فعل مستقبل
۱	جاتا ہوں	x	x
۲		گئے	
۳			
۴			
۵			
۶	x	x	جائیگا
۷			
۸			

مندردیل جملوں میں سے اسم تصغیر، اسم مکتبر، اسم صوت، اسم آلہ اور اسم ظرف الگ کر کے خالی جگہوں میں لکھیے:

۱۔ آپ دوپہر کے وقت اپنے باغ میں قینچی سے میوے کاٹ رہے تھے اور ایک ٹوکری میں رکھتے تھے۔

۲۔ بھائی وہ ٹوکری نہیں ٹوکرا تھا۔ آج صبح میں بازار سے خرید کر لایا۔

۳۔ وہ اپنے باغیچے میں کدال سے کام کر رہا ہے۔ اس باغیچے میں کہیں سے کائیں کائیں اور چوں چوں کی آواز آرہی ہے۔

اسم تصغیر:-

(ٹوکری) ، ()

اسم مکتبر:-

(باغ) ، ()

اسم آلہ:-

(قینچی) ، ()

اسم ظرفِ مکاں:-

(باغ) ، ()

اسم ظرفِ زماں:-

(دوپہر) ، ()

اسم صوت:-

(کائیں کائیں) ، ()

میں کون ہوں؟

۱۔ میرا تعلق گزرے ہوئے زمانے کے ساتھ۔

۲۔ میرا تعلق دو زمانوں کے ساتھ ہے موجودہ اور آنے والے زمانے سے۔

۳۔ میں تو کام نہ کرنے کا حکم یا مشورہ یا نصیحت کرتا ہوں۔

۴۔ میرا تعلق موجودہ زمانے کے ساتھ

۵۔ میرا تعلق آنے والے زمانے کے ساتھ۔

۶۔ میں تو کام کرنے کا حکم نصیحت یا مشورہ دیتا ہوں۔

فعل حال

مندرجہ ذیل اسمائے ذات کے سامنے لکھیے کہ وہ کس قسم کے اسمائے ذات ہیں۔

	گھڑیال =	اسم ظرفِ زماں	نصف شب =
	مسجد =		ٹن ٹن =
	کتابچہ =		چاقو =

تصویر غور سے دیکھیے۔ درج ذیل نامکمل اقتباس کو مکمل کر کے مضمون بناؤ۔



یوں تو ہمارے یہاں اسکول میں تقریباً چالیس سا تازہ صاحبان ہیں۔ ہر ایک استاد بجائے خود ایک مثال ہے۔ ہمیں۔ اس کا یہ مطلب نہیں کہ ہم کسی کی خوبیوں کو نظر انداز کر کے دوسرے کو ترجیح دیں۔۔۔ مثلاً (۱) اسکی تعلیم قابلیت (۲) اس کو کس قدر علیت پر عبور (۳) پڑھانے کا ڈھنگ وغیرہ وغیرہ۔۔۔ اوپر کی چند باتوں۔ ان کے امر صاف بیان کرنے سے پہلے میں یہ کہوں گا کہ۔

Winter Assignment 3rd Language [HINDI]

अभ्यास कार्य – कक्षा – 6 – हिन्दी – तृतीय भाषा

सत्र 2023 – 24

प्रश्न 1 निम्नलिखित प्रश्नों के उत्तर लिखो –

1. फूल तोड़ने के कुछ देर बाद वह मुरझा क्यों जाता है?
2. पेड़ की जड़ें पौधे के लिए क्या काम करती हैं?
3. अंकित ने अपने मित्र के लिए क्या खरीदा?
4. दादा जी ने अंकित को पजल खिलौनें क्यों दिलाए?

प्रश्न 2 खाली स्थान भरो—

1. हम " " खरीद कर अंदर पहुँचे।
2. मुझे भी उपहार में कुछ " " मिली।
3. मेले में पुस्तको की " " दुनिया देखकर मुझे अच्छा लगा।

प्रश्न 3. निम्न शब्दों के वचन बदलो—

पुस्तक, मेला, कविता, किताब, खिलौना

प्रश्न 4. समान अर्थ वाले शब्द लिखो—

कतार, खाना, पुस्तक, उपहार, अनोखी

प्रश्न 5. माइकल फ़ैराडे के जीवन पर दस वाक्य अपने शब्दों में लिखो।

अभ्यास कार्य – कक्षा – 6 – हिन्दी – तृतीय भाषा

सत्र 2023 – 24

प्रश्न 1 अ से झ तक वर्णमाला लिखो –

प्रश्न 2. खाली स्थान भरो –

क			घ	
च		ज		
	ठ		ढ	
	थ			न
प		ब	भ	

प्रश्न 3. हमें मालूम होना चाहिए—

अपना नाम

पिता जी का नाम

माता जी का नाम

भाई / बहन का नाम

प्रश्न 4. मात्राओं को वर्ण के साथ मिलाओ –

।	आ
ि	रि
ी	कू
ु	की
ू	ओ
्र	औ
ृ	तु
्रि	मै
्रि	लै

प्रश्न 5. दस फलों के नाम लिखो।


प्रश्न 6. दस सब्जियों के नाम लिखो

प्रश्न 7. दस जानवरों के नाम लिखो।

अभ्यास कार्य – कक्षा – 6 – हिन्दी – तृतीय भाषा

सत्र 2023 – 24

प्रश्न 1 मानव शरीर के अंगों के नाम लिखो-



प्रश्न 2. अनेक शब्दों के लिए एक शब्द लिखो –

प्रतिमास में होने वाला

वर्ष में एक बार होने वाला

जो विज्ञान से संबन्धित हो

जहां पढ़ने के लिए पुस्तके हो

प्रश्न 3. समान अर्थ वाले शब्दों का मिलान करो-

बाल

दंत

दांत

जिह्वा

घडा

केश

जीभ

मटका

अभ्यास कार्य – कक्षा – 6 – हिन्दी – द्वितीय भाषा

सत्र 2023 – 24

प्रश्न 1 अपठित गद्यांश पढ़कर निम्न प्रश्नों के उत्तर लिखो—

ताजमहल वास्तुकला का एक अद्भुत नमूना है। यह विश्व के सात अजूबों में से एक है। ताजमहल का निर्माण मुगल बादशाह शाहजहां ने करवाया था। इसका निर्माण लगभग बीस हजार मजदूरों ने बीस वर्षों में किया था। ताजमहल के प्रवेश द्वार पर लाल पत्थर लगे हैं, जिन पर कुरान की आयतें खुदी हैं। ताज के गुंबद और मीनारें दूर से ही दिखाई देते हैं। ताजमहल संगमरमर के एक भव्य चबूतरे पर बना है। इसके चारों कोनों पर संगमरमर की चार मीनारें हैं। शरद पूर्णिमा की चांदनी रात में ताजमहल ऐसा प्रतीत होता है, मानो दूध से नहाया हुआ है। अपनी सुंदरता और कारीगरी के कारण यह पूरे विश्व में प्रसिद्ध है।

1. ताजमहल का निर्माण किसने और कहां करवाया?

उत्तर.....

2. ताजमहल सबसे अधिक सुंदर कब प्रतीत होता है?

उत्तर.....

3. ताजमहल के प्रवेश द्वार की क्या विशेषता है?

उत्तर.....

4. ताजमहल के निर्माण में कितना समय लगा?

उत्तर.....

प्रश्न 2 निम्न उपसर्ग लगाकर शब्द लिखो—

1. अप

2. अनु

3. अन

4. कम

प्रश्न 3 निम्न शब्दों के वचन बदलकर लिखो—

पुस्तक बहन

लडकी..... मिठाई.....

बच्चा..... सखी.....

प्रश्न 4 निम्न शब्दों के लिंग बदलकर लिखो—

सुनार

चौधरी

लुहार

देवर

अनुज

सेठ

प्रश्न 5. गांधी जी इतना पैदल क्यों चलते थे? पैदल चलने के क्या – क्या लाभ हैं?

प्रश्न 6. दिए गए मुहावरो का अर्थ बताकर वाक्य में प्रयोग करो।

आंखे बिछाना , आंच न आने देना, उंगली उठाना, आग लगाना, अक्ल पर पत्थर पडना

प्रश्न 7 अनुच्छेद लेखन – बाल मजदूरी

प्रश्न 8 निबंध लेखन – प्रतिदिन बढ़ता प्रदूषण ।

प्रश्न 9 चित्र देखकर दस पंक्तियां लिखो।




6. COMPUTER WINTER ASSIGNMENT GRADE 6

Topic: LOG on To Flash CS6

Q1. Students will have to prepare a list of tools of Flash CS6 with explanation of the same.

Q2, Using Line tool, Rectangle, Oval Tool,. Text Tool draw the given image.



TOPIC: Tables and Borders in MS PowerPoint 2010

Q3. Explain with the help proper diagram the components of the chart with labeling and explanation of the same

TOPIC: Animation effects in MS- Powerpoint

Q5. Create a Presentation on “WINTER IN KASHMIR” with visual effects. Select Custom Animation and Transition effect for each slide. Prepare at least 6 slides for the presentation.

Note: All the work will be saved in one folder by the students and submitted when asked by the concerned teacher.