



G.D Goenka Public School Srinagar

Subject: Maths





Topic: Revision

Grade:KG

Dated:19.11.2021

Q 1: Observe the pattern and choose next.



- a.  b. 
- c.  d. 

Q 2: Look at the pattern and choose which tree will be after the coconut tree.



- a.  b. 
- c.  d. 



Q 3: What comes after grapes.



Q 4: Addition fact of 6 is,

a. $+ ? = ?$ **b.** + = 6

c. = 3 **d.** = 4

Q 5: Which is the addition fact of 3.

a. $4+1$

b. $0+3$

c. $2+1$

d. both b & c



Q:6 Unscramble the given number and choose the correct option.

evens

- a.even b.eight**
d.seven d.none of these

Q7. Choose the correct sign.

56 _____ 45

- a.> b.<**
c.? d.=

Q 8: Choose the correct spelling of the number 9.

- a. nien b. nine**
c. ninee d. none of these



Q 9: Count the cars and write the value

_____.



Q10: Look at the picture below, count the total number of lolly pops.

$6 + 1 =$



Q:11 Count the bicycle in all.

+ =

a. 3 b. 4

c. 7 d. 0